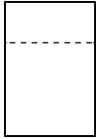
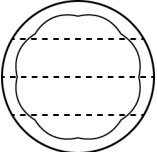
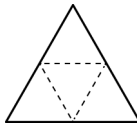
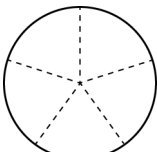
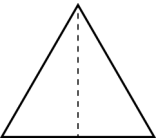
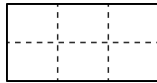

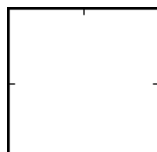

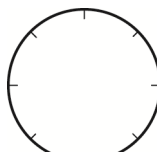



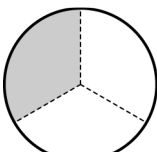
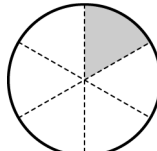
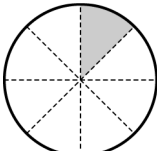
一 下面有等分分的在()裡打 \checkmark 。
(每題3分，共18分)

1.  ()	2.  ()	3.  ()
4.  ()	5.  ()	6.  ()


二 先分分看。再塗一塗。
(每題4分，共8分)

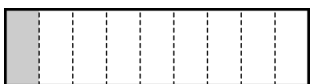



1. 1塊餅乾 	把 $\frac{1}{2}$ 塊餅乾 塗上顏色。 
2. 1個披薩 	把 $\frac{1}{4}$ 個披薩 塗上顏色。 

三 塗色部分是多或少個蛋糕？用分數填填看。(每題6分，共18分)


1 個蛋糕 	1.  () 個蛋糕
2. 	3.  () 個蛋糕

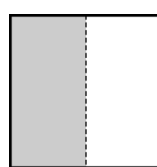
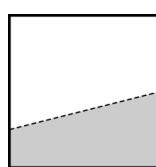
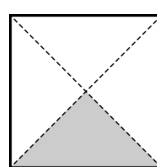
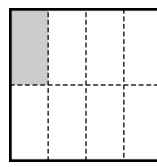

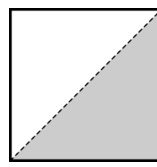
四 看圖回答問題。(每小題4分，共44分)

1.  這是1條生乳捲，
下面圖的塗色部分各是幾條生乳捲？連連看。

(1) 	•	•	$\frac{1}{2}$ 條
(2) 	•	•	$\frac{1}{3}$ 條
(3) 	•	•	$\frac{1}{4}$ 條
(4) 	•	•	$\frac{1}{9}$ 條

(5) $\frac{1}{9}$ 條生乳捲和 $\frac{1}{3}$ 條生乳捲，
哪一個比較大？圈圈看。
($\frac{1}{9}$ 條 , $\frac{1}{3}$ 條)

2. 右圖是1張圖畫紙，
下面塗色部分是 $\frac{1}{2}$ 張的()裡打 \checkmark 。
1張圖畫紙 

(1) 	(2) 	(3) 
(4) 	(5) 	(6) 

五 圈圈看。(每題4分，共12分)

1. 把一個大餅等分分成12份，其中1份是($\frac{1}{12}$, $\frac{12}{1}$)個大餅。

2. $\frac{1}{5}$ 條繩子是指1條繩子等分分成(1份 , 5份)中的1份繩子。

3. 媽媽把1條芋頭捲等分分成8份，小雨吃了其中1份，小雨吃了($\frac{1}{8}$, $\frac{8}{8}$)條芋頭捲。